

Handouts with Answers

Connect (using a line) the following descriptions or activities with the corresponding state of water.

Swimming in the pool.

Ice skating on a pond.

Sliding down a hill.

Drinking a cool glass of water.

Snowshoeing in a woodland.

Waterskiing in a lake.

Making a snowman.


Hot humid summer day.

Scraping frost off a car window.

Watering your garden.

Clouds covering mountain tops.

Walking in the rain with an umbrella.



**Solid**



**Liquid**



**Gas**

Handouts with Answers

## Water is everywhere





Find the hidden words

Y	P	O	U	J	E	C	H	F	A	W	I	E	U
A	R	C	J	L	A	K	E	O	R	G	V	R	H
Q	E	E	F	Y	D	I	B	O	I	C	E	E	A
H	C	A	B	J	A	T	F	K	W	C	Z	V	I
C	I	N	R	X	L	F	R	Q	A	L	Y	A	L
P	P	I	F	E	V	E	O	O	T	O	R	P	S
S	I	V	O	P	P	R	S	S	E	U	Y	O	T
N	T	R	G	G	H	Z	T	T	R	D	U	U	O
O	A	N	U	L	R	P	H	E	J	I	P	R	N
W	T	M	V	A	A	W	O	A	V	X	Q	A	E
M	I	E	W	C	I	Y	T	M	B	B	Y	T	G
M	O	L	G	I	N	Y	A	O	E	H	H	I	E
M	N	T	B	E	Y	B	Y	L	G	L	F	O	H
P	G	L	T	R	O	T	Y	S	P	R	I	N	G

[www.educol.net](http://www.educol.net)

- |               |             |
|---------------|-------------|
| Cloud         | Evaporation |
| Fog           | Frost       |
| Glacier       | Hailstone   |
| Ice           | Lake        |
| Melt          | Ocean       |
| Precipitation | Rain        |
| Snow          | Spring      |
| Steam         | Water       |

Handouts with Answers



The above pictures are those of snowflakes. How many sides do you see on a snowflake?

A snowflake has **6** sides.

What shape is a snowflake? A snowflake is a **hexagon**.

Look at the pictures below. Circle the ones that have the same shape as a snowflake.



Handouts with Answers

Name: \_\_\_\_\_

# Water Cycle

Put numbers in the picture to correspond with the following water cycle words:

- ① Sun
- ② Clouds
- ③ Evaporation
- ④ Precipitation
- ⑤ Condensation
- ⑥ Clouds

